



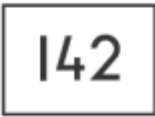

ROUNDING

KS1 – 2001 Paper

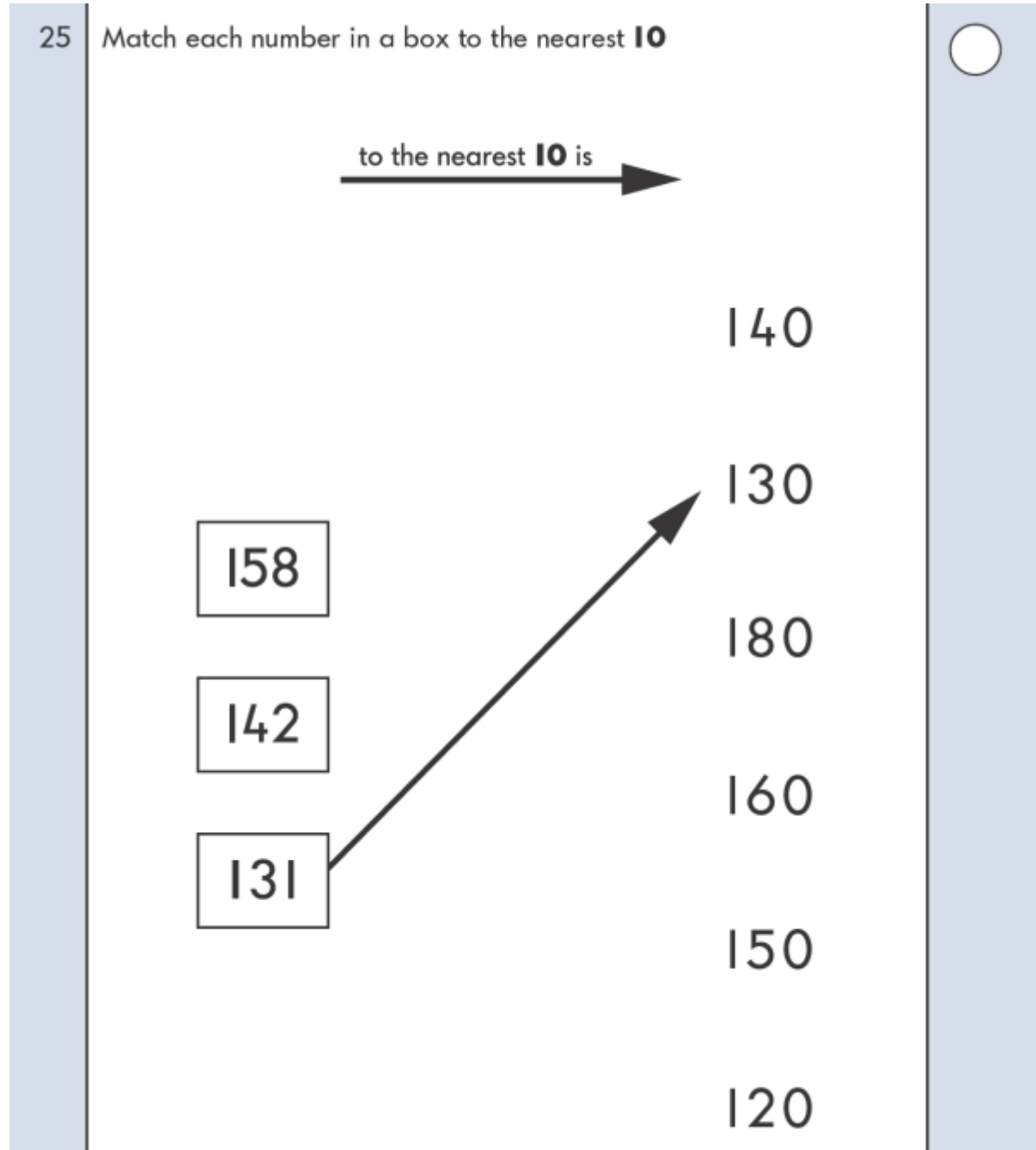
1.

25 Match each number in a box to the nearest **10**

to the nearest **10** is 

140
130
180
160
150
120



KS1 – 2003 Paper 2

2.

8

Write the missing number.



KS1 – 2005 Paper 1

3.

17

Which number is **nearest to 80**?

Draw a ring around it.

83

84

77

88

78



KS1 – 2007 Paper 1

4.

20

Write each number in the correct box.

One is done for you.

~~33~~

17

12

28

rounds to 10	rounds to 20	rounds to 30
		33



Here are some numbers.

307 249 355 297 311

Write **one** of the numbers in the box to make this correct.

The number

rounded to the nearest **10** is **300**

